

# TAMBAH DAN TOLAK NOMBOR HINGGA 10

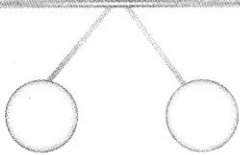
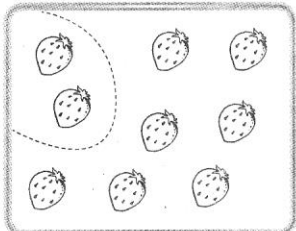


**A** Tulis pasangan nombor yang membentuk 9.

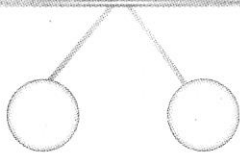
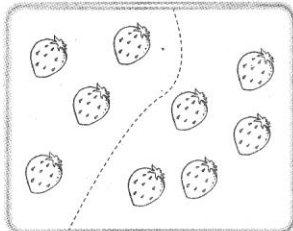
2.1(i)

BID5E1

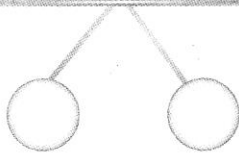
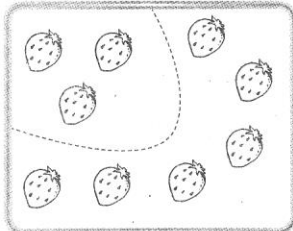
1



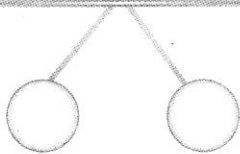
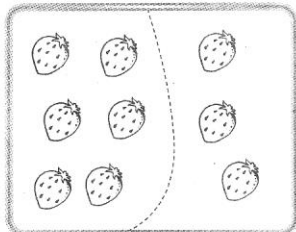
2




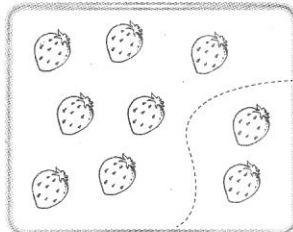
3



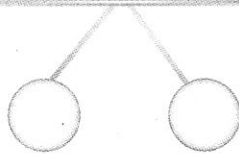
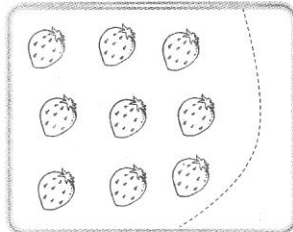
4



5



6

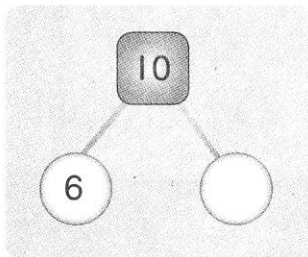


**B** Tulis pasangan nombor yang sesuai.

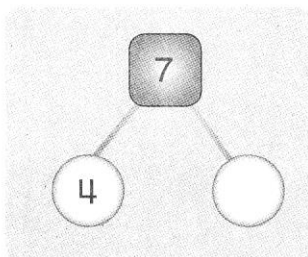
2.1(i,iii)

BID5E1

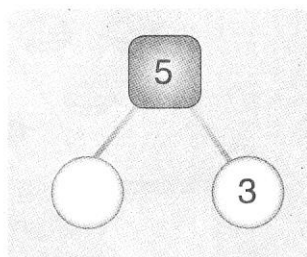
1



2



3



Tema	Band	Standard Kandungan	Standard Pembelajaran	Deskriptor	Evidens	Standard Prestasi
Tambah dan Tolak Nombor Hingga 10	1	2.1 Mengenal pasti pasangan nombor untuk membentuk satu nombor yang berkaitan.	2.1(i) 2.1(i,iii)	BID5	EI	BID5E1

**PENILAIAN**

Menguasai

Tidak Menguasai

Tandatangan guru: \_\_\_\_\_