

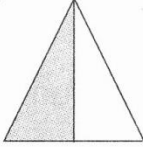

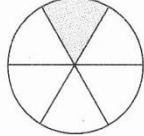









PECAHAN



A Padankan.

6.1(i)

B2D3E1

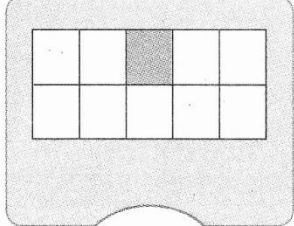
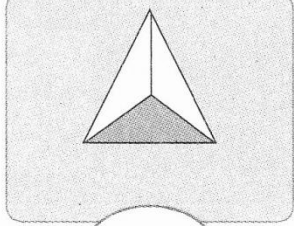
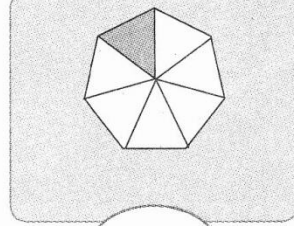





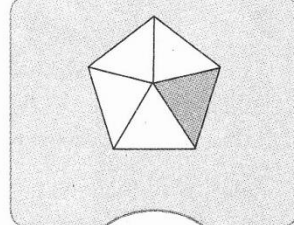



1 	2 	3 	4 
			
			
$\frac{1}{6}$	$\frac{1}{2}$	$\frac{1}{8}$	$\frac{1}{4}$



B Tulis pecahan berdasarkan rajah berikut.

6.2(i)

B2D3E1

1 	2 	3 
		
4 	5 	6 
		

Tema	Band	Standard Kandungan	Standard Pembelajaran	Deskriptor	Evidens	Standard Prestasi
Pecahan	2	6.1 Menamakan pecahan wajar. 6.2 Menulis pecahan wajar.	6.1(i) 6.2(i)	B2D3	E1	B2D3E1

PENILAIAN

Menguasai

Tidak Menguasai

Tandatangan guru: _____