










Name \_\_\_\_\_

# Apple Addition

Add the pictures..

 $2 + 1 = \underline{\quad}$	 $1 + 6 = \underline{\quad}$	 $3 + 2 = \underline{\quad}$
 $5 + 1 = \underline{\quad}$	 $2 + 2 = \underline{\quad}$	 $1 + 3 = \underline{\quad}$
 $3 + 4 = \underline{\quad}$	 $1 + 1 = \underline{\quad}$	 $3 + 3 = \underline{\quad}$



Name \_\_\_\_\_

# Fox Friends

## Addition

Directions: Fill in the sum. Color the pictures.

$2+6 = \square$



$8+2 = \square$

$5+4 = \square$

$3+4 = \square$

$1+3 = \square$

$7+2 = \square$

$3+7 = \square$



$6+4 = \square$

$4+4 = \square$

$5+0 = \square$

$6+3 = \square$

$4+2 = \square$

$3+2 = \square$



$4+4 = \square$

$2+1 = \square$

$2+5 = \square$

Name: \_\_\_\_\_



# Sticky Facts



Color the addition facts that match the answer.

5

7

9

4

$3 + 3$

$4 + 3$

$5 + 4$

$2 + 3$

$3 + 2$

$5 + 2$

$3 + 6$

$2 + 2$

$2 + 4$

$4 + 2$

$5 + 5$

$3 + 1$

$4 + 1$

$2 + 5$

$4 + 3$


$1 + 3$

Name \_\_\_\_\_


Date \_\_\_\_\_

## DOMINO ADDITION SHEET 3


Count the number of dots on each domino and fill in the total.




$$\underline{\quad} + \underline{\quad} = \underline{\quad}$$




$$\underline{\quad} + \underline{\quad} = \underline{\quad}$$




$$\underline{\quad} + \underline{\quad} = \underline{\quad}$$




$$\underline{\quad} + \underline{\quad} = \underline{\quad}$$




$$\underline{\quad} + \underline{\quad} = \underline{\quad}$$




$$\underline{\quad} + \underline{\quad} = \underline{\quad}$$




$$\underline{\quad} + \underline{\quad} = \underline{\quad}$$




$$\underline{\quad} + \underline{\quad} = \underline{\quad}$$




$$\underline{\quad} + \underline{\quad} = \underline{\quad}$$



$$\underline{\quad} + \underline{\quad} = \underline{\quad}$$



$$\underline{\quad} + \underline{\quad} = \underline{\quad}$$



$$\underline{\quad} + \underline{\quad} = \underline{\quad}$$