

Name: \_\_\_\_\_

### Adding Rain Drops

Add the numbers in the clouds. If you need help, count the rain drops.

$$\begin{array}{c} \text{5} \\ \text{5 rain drops} \end{array} + \begin{array}{c} \text{6} \\ \text{6 rain drops} \end{array} = \text{cloud}$$

$$\begin{array}{c} \text{9} \\ \text{9 rain drops} \end{array} + \begin{array}{c} \text{4} \\ \text{4 rain drops} \end{array} = \text{cloud}$$









$$\begin{array}{c} \text{7} \\ \text{7 rain drops} \end{array} + \begin{array}{c} \text{5} \\ \text{5 rain drops} \end{array} = \text{cloud}$$

$$\begin{array}{c} \text{8} \\ \text{8 rain drops} \end{array} + \begin{array}{c} \text{3} \\ \text{3 rain drops} \end{array} = \text{cloud}$$

Name: \_\_\_\_\_

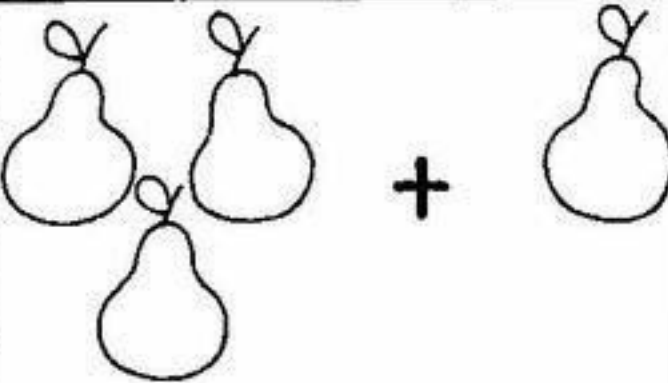

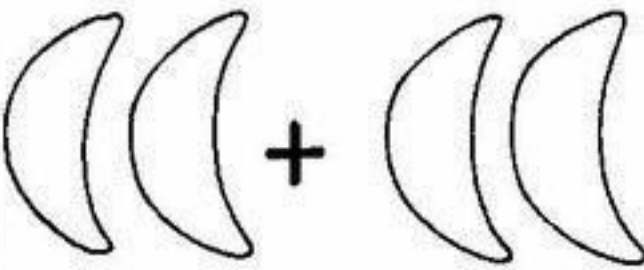
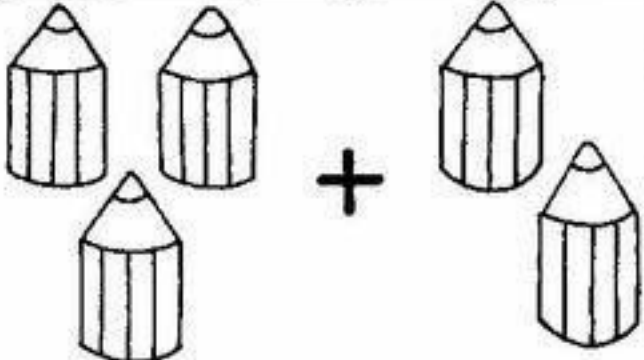
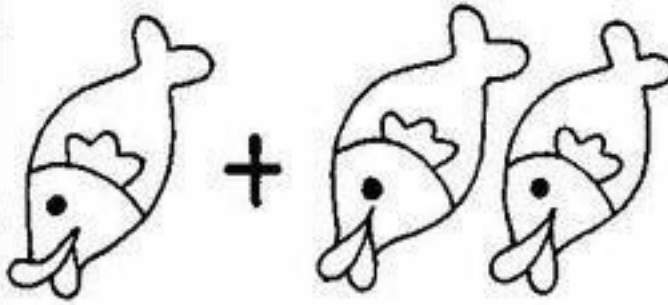

### Picture Addition

Count, add and write the correct number in the box

		<input type="text"/>
4	+	2 =
		<input type="text"/>
3	+	3 =
		<input type="text"/>
2	+	1 =
		<input type="text"/>
4	+	3 =

# Optellen

Maak de sommen, de figuren boven de som helpen je.

 <p><math>3 + 1 = \cdot</math></p>	 <p><math>4 + 2 = \cdot</math></p>
 <p><math>2 + 2 = \cdot</math></p>	 <p><math>3 + 2 = \cdot</math></p>
 <p><math>1 + 2 = \cdot</math></p>	 <p><math>3 + 3 = \cdot</math></p>

Doel: optellen met behulp van voorwerpen.