


Name \_\_\_\_\_


Solve the addition problems. Use the pictures for help.



$$5 + 4 =$$



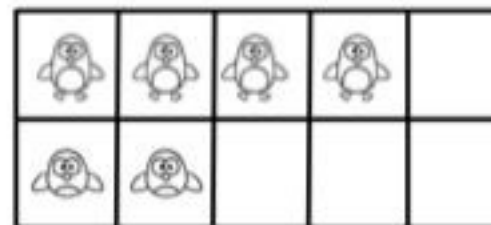
$$4 + 4 =$$



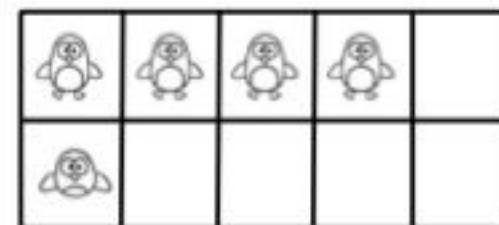
$$5 + 3 =$$



$$3 + 3 =$$

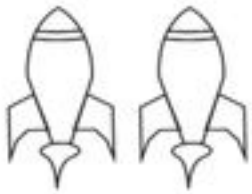


$$4 + 2 =$$




$$4 + 1 =$$

# Addition




2

+



3

=




4

+



2

=




4

+



3

=



5

+



2


=




Name \_\_\_\_\_

Date \_\_\_\_\_


Adding to 5




$1 + 3 = \square$




$2 + 2 = \square$




$1 + 2 = \square$




$4 + 1 = \square$




$2 + 3 = \square$



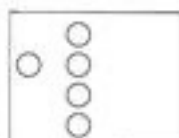
$3 + 1 = \square$



$3 + 2 = \square$



$1 + 1 = \square$



$1 + 4 = \square$



1

+

3

=

5

4

3



2

+

4

=

6

5

2



2

+

2

=

4

6

9



5

+

1

=

3

6

8



3

+

2

=

1

9

5