



Directions: count the ten frame and write the number on the line. Draw hearts for the next number. Add them together to get your teen number!

Name: _____


We Love TEEN Numbers!




$$\underline{10} + 3 = 13$$




$$\underline{\quad} + 4 =$$




$$\underline{\quad} + 1 =$$




$$\underline{\quad} + 8 =$$




$$\underline{\quad} + 7 =$$




$$\underline{\quad} + 6 =$$




$$\underline{\quad} + 2 =$$



$$\underline{\quad} + 0 =$$



$$\underline{\quad} + 9 =$$



$$\underline{\quad} + 5 =$$

Double Trouble

Knowing your doubles is very helpful in addition. Take some time to learn the doubles with the help of the following page, and when you think you've learned them, come back and try this page.



$5 + 5 = \underline{\quad}$

$3 + 3 = \underline{\quad}$

$2 + 2 = \underline{\quad}$

$9 + 9 = \underline{\quad}$

$7 + 7 = \underline{\quad}$

$8 + 8 = \underline{\quad}$

$6 + 6 = \underline{\quad}$

$4 + 4 = \underline{\quad}$

$1 + 1 = \underline{\quad}$

$2 + 2 = \underline{\quad}$

$3 + 3 = \underline{\quad}$

$6 + 6 = \underline{\quad}$

$7 + 7 = \underline{\quad}$

$8 + 8 = \underline{\quad}$

$4 + 4 = \underline{\quad}$

$1 + 1 = \underline{\quad}$

$9 + 9 = \underline{\quad}$

$10 + 10 = \underline{\quad}$

$5 + 5 = \underline{\quad}$

$6 + 6 = \underline{\quad}$

$2 + 2 = \underline{\quad}$

$3 + 3 = \underline{\quad}$

$1 + 1 = \underline{\quad}$

$8 + 8 = \underline{\quad}$

$6 + 6 = \underline{\quad}$

$2 + 2 = \underline{\quad}$

$1 + 1 = \underline{\quad}$

$4 + 4 = \underline{\quad}$

$9 + 9 = \underline{\quad}$













$7 + 7 = \underline{\quad}$

$10 + 10 = \underline{\quad}$

$5 + 5 = \underline{\quad}$

Le addizioni del lombrico

- Esegui le addizioni all'interno del lombrico.

 $6+1 =$ <input type="text"/>	 $4+6 =$ <input type="text"/>
 $2+6 =$ <input type="text"/>	 $6+5 =$ <input type="text"/>
 $5+5 =$ <input type="text"/>	 $7+3 =$ <input type="text"/>
 $3+6 =$ <input type="text"/>	 $7+4 =$ <input type="text"/>
 $5+7 =$ <input type="text"/>	 $7+7 =$ <input type="text"/>
 $6+7 =$ <input type="text"/>	 $8+2 =$ <input type="text"/>